



2nd Swiss Finals

26 November 2016

Multimedia Test

Questions Booklet

- Do NOT open the booklet before instructed to do so by a supervisor.
- Write your answer on the separate **Answer Sheet**.
- Only the answer sheet will be marked.
- Give only ONE answer to each question.

Question 1

Which town is shown on the satellite image?

- a) New York
- b) London
- c) Tokyo
- d) Vancouver

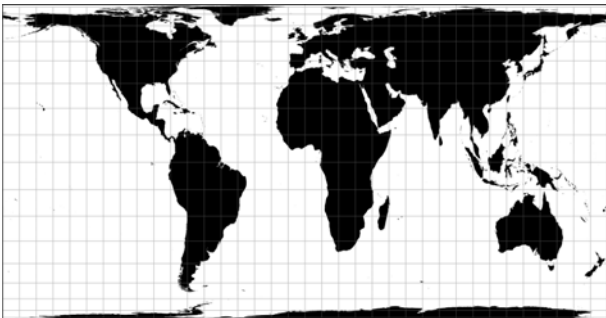


Question 2

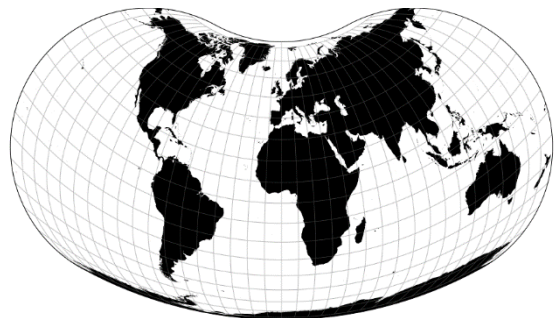
Which map is not equal area?

- a) A
- b) B
- c) C
- d) D

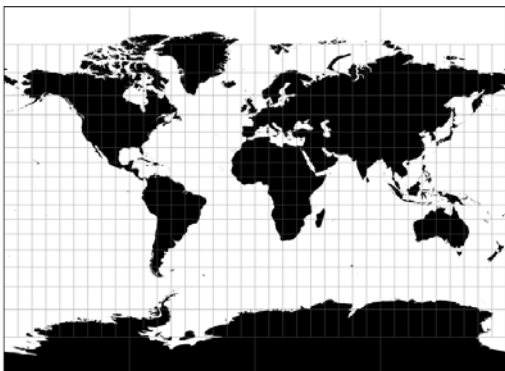
A



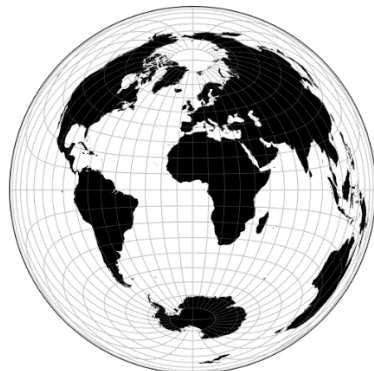
B



C



D



Question 3

What kind of coastal landform is shown on the image?

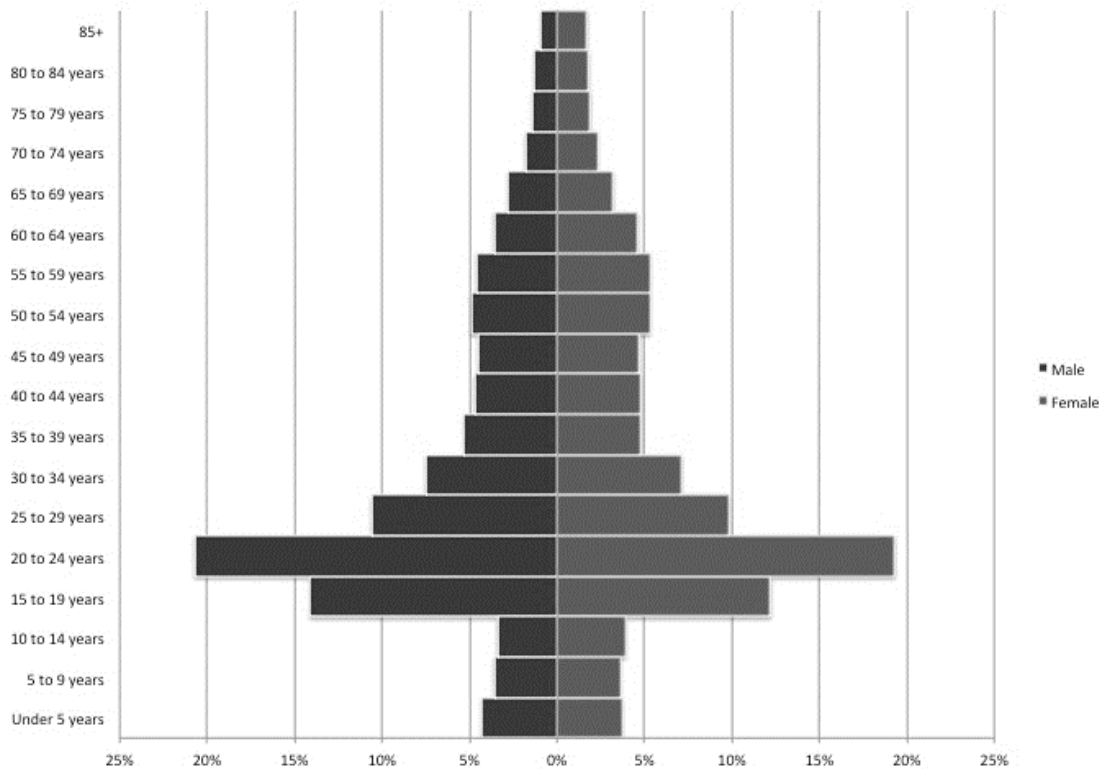
- a) rias coastline
- b) fjord
- c) lagoon
- d) estuary



Question 4

This age pyramid is a typical result of:

- a) high birth rate
- b) high death rate
- c) immigration
- d) emigration



Question 5

This rock formation is formed by which erosion?

- a) wind
- b) glacier
- c) water
- d) temperature



Question 6

The lines in the rock are formed by:

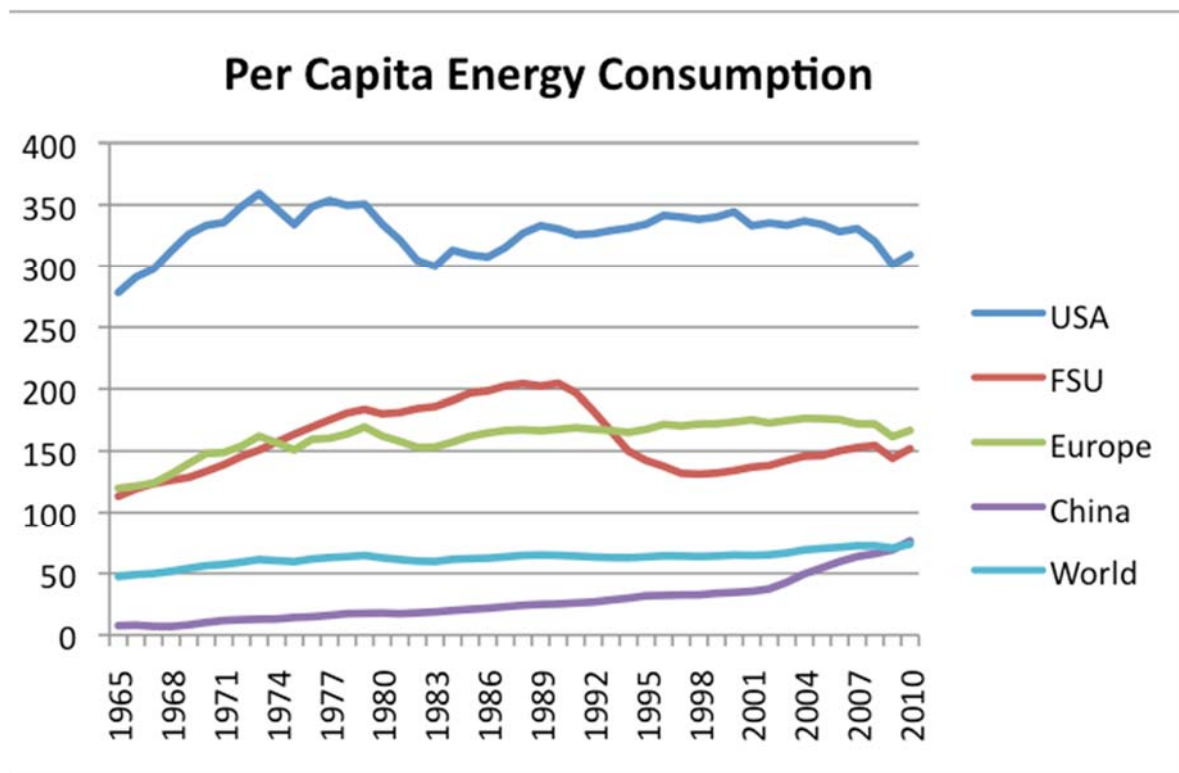
- a) wind
- b) glacier
- c) water
- d) rock formations



Question 7

Which of the following statements is true?


- a) China has the largest per capita energy consumption.
- b) China and the USA have both approximately the same total energy consumption.
- c) China and the USA have both approximately the same per capita energy consumption.
- d) The per capita energy consumption of the world is decreasing.



Question 8

The glacier tongue shown on the picture is characteristic for:

- a) a glacial advance
- b) a glacial stagnation
- c) a glacial retreat
- d) an ice avalanche



Question 9

The following map of Africa shows the distribution of:

- a) coffee cultivation
- b) corn cultivation
- c) cocoa cultivation
- d) rice cultivation



Question 10

Which order is correct?

Glacial trough – Gorge – Canyon – V-shaped Valley

- a) A-D-B-C
- b) B-A-D-C
- c) B-D-C-A
- d) A-C-B-D

A



B



C



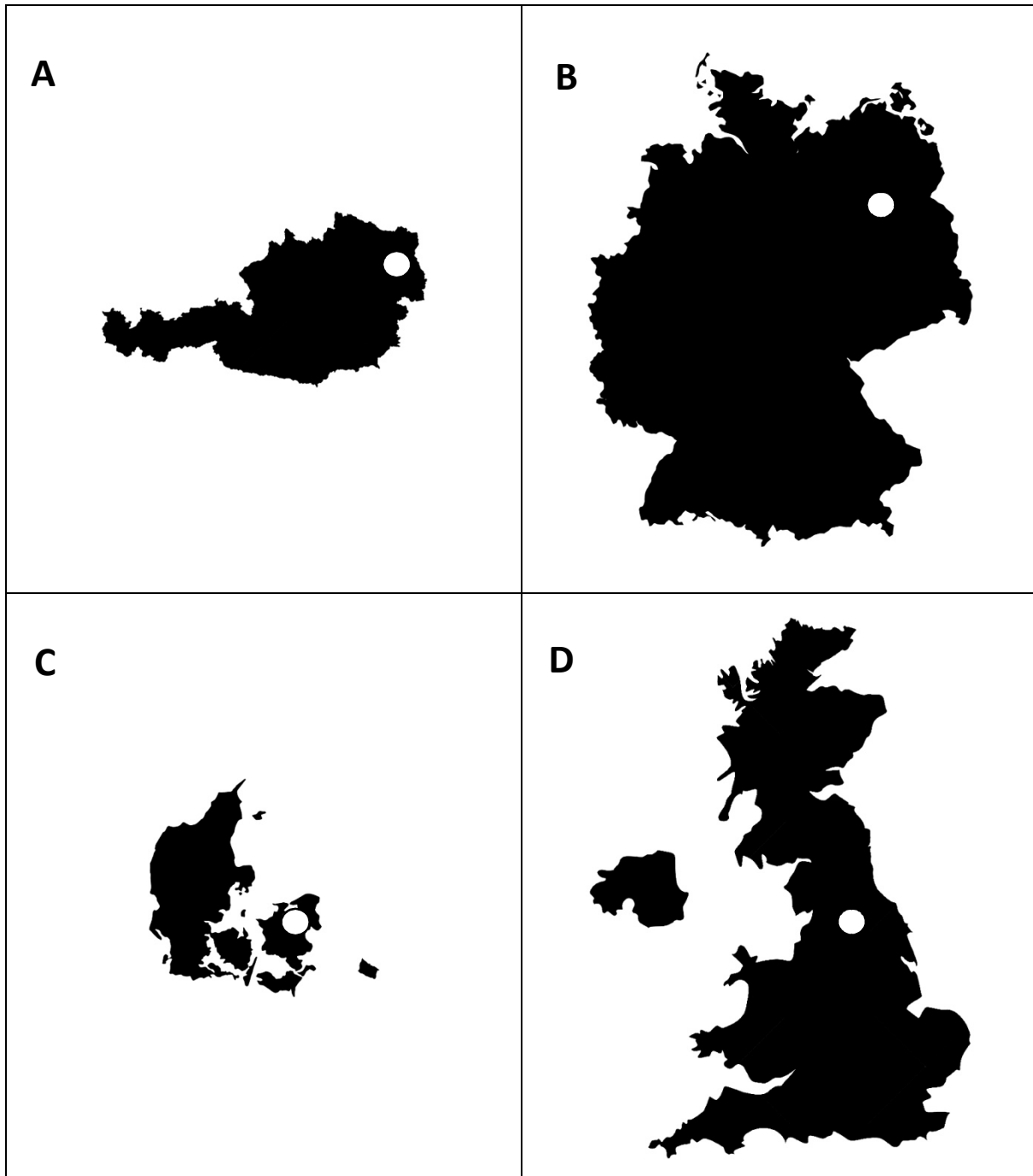
D



Question 11

Which capital city is marked on a wrong place? (The images are true to scale)

- a) A
- b) B
- c) C
- d) D



Question 12

Which statement represents the advertising best?

Due to globalisation, big companies...

- a) ... decrease their local product adjustments.
- b) ... decrease their stores in the world.
- c) ... are all over the world.
- d) ... are all over the world, but often with local product adjustments.



Question 13





Which natural hazard is prevented by the infrastructure shown on the image?

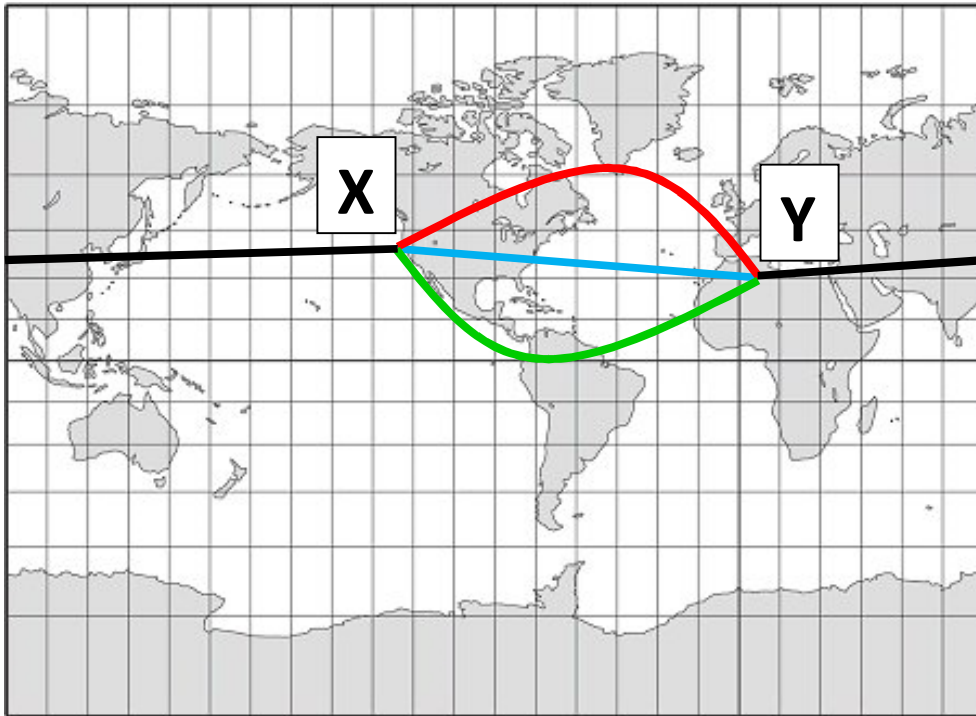
- a) rockfall
- b) mudslide
- c) avalanche
- d) windstorm



Question 14

Which is the shortest distance from X to Y in reality?

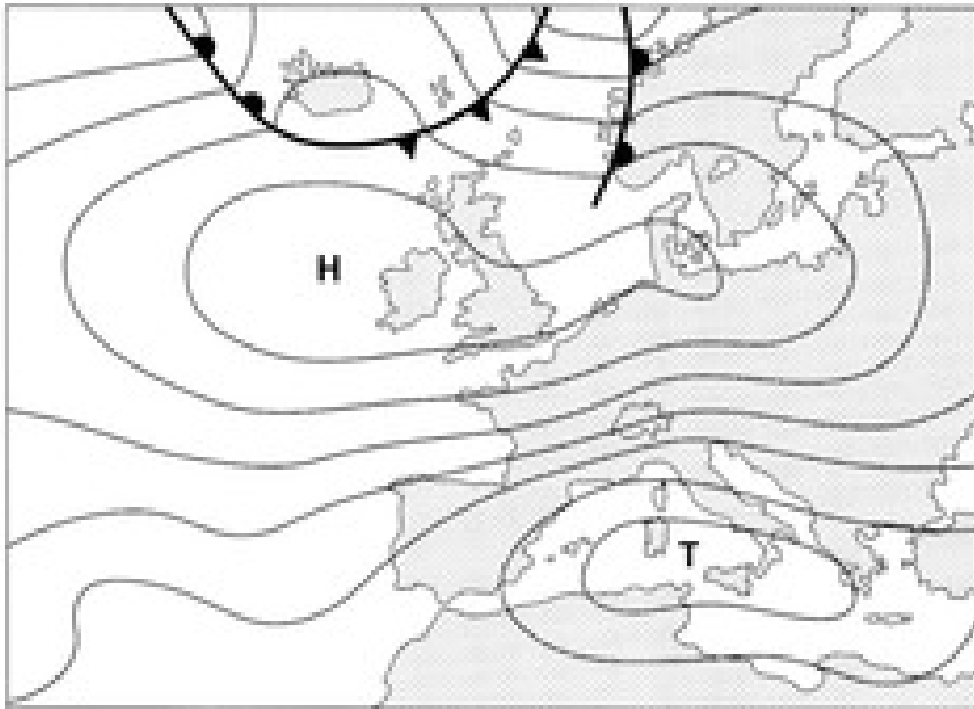
- a) 
- b) 
- c) 
- d) 



Question 15

What kind of wind do you expect in Switzerland?

- a) dry easterly wind
- b) wet easterly wind
- c) dry westerly wind
- d) wet westerly wind



Question 16

What kind of urban development is shown on the picture?

- a) sustainable housing
- b) reurbanisation
- c) spatial consolidation
- d) urban sprawl



Question 17

This flag represents:

- a) Irland
- b) Thailand
- c) Malaysia
- d) India



Question 18

The women on the picture are carrying:

- a) oil
- b) water
- c) rice
- d) milk



Question 19

Which natural hazard destroyed the houses?

- a) tornado
- b) tsunami
- c) hurricane
- d) earthquake



Question 20

Which touristic hot spot is shown on the picture?

- a) Las Vegas
- b) Hollywood
- c) San Francisco
- d) Miami Beach

