

1. Schweizer Finale

21. November 2015

Multimedia Test

Questions Booklet

- Do NOT open the booklet before instructed to do so by a supervisor.
- Write your answer on the separate **Answer Sheet**.
- Only the answer sheet will be marked.
- Give only ONE answer to each question.

Question 8

The name of the landform in this photograph is:

- a) V-shaped valley
- b) Glacial trough
- c) Canyon
- d) Gorge



Question 9

What type of weathering is illustrated in this photograph:

- a) Frost weathering**
- b) Chemical weathering**
- c) Thermal stress weathering**
- d) Biological weathering**



Question 10

Which landform (photographs A, B, C, D) originates from a volcanic process?

a) Photograph A

b) Photograph B

c) Photograph C

d) Photograph D


A



B



C



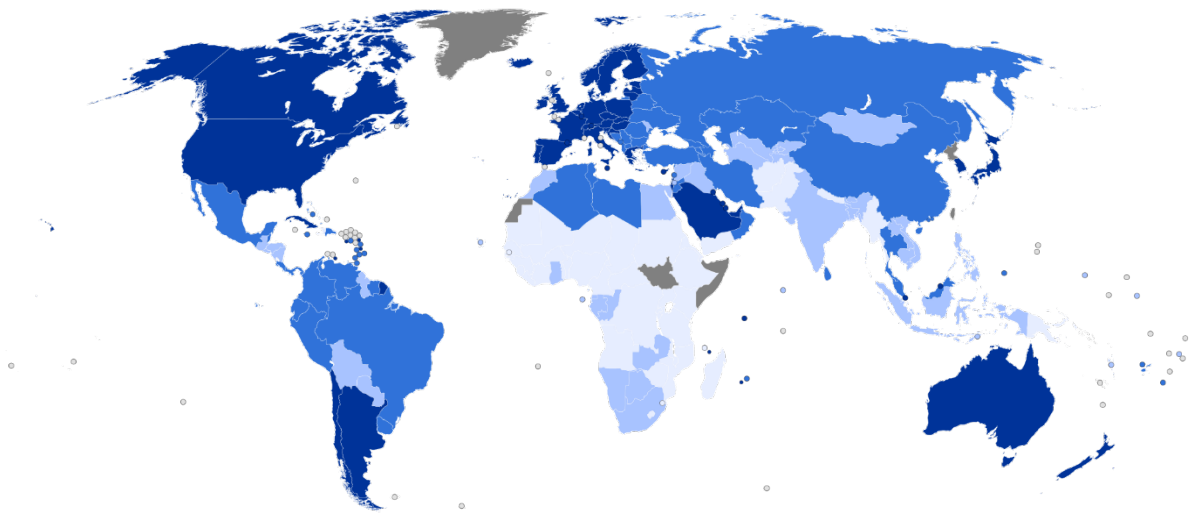
D



Question 11

This map from the year 2013 illustrates:


- a) Deforestation
- b) Population density
- c) Human development
- d) Precipitation



Question 12

Compare the Google Earth map (above) to the photograph (below).
Into which direction does the photograph point?

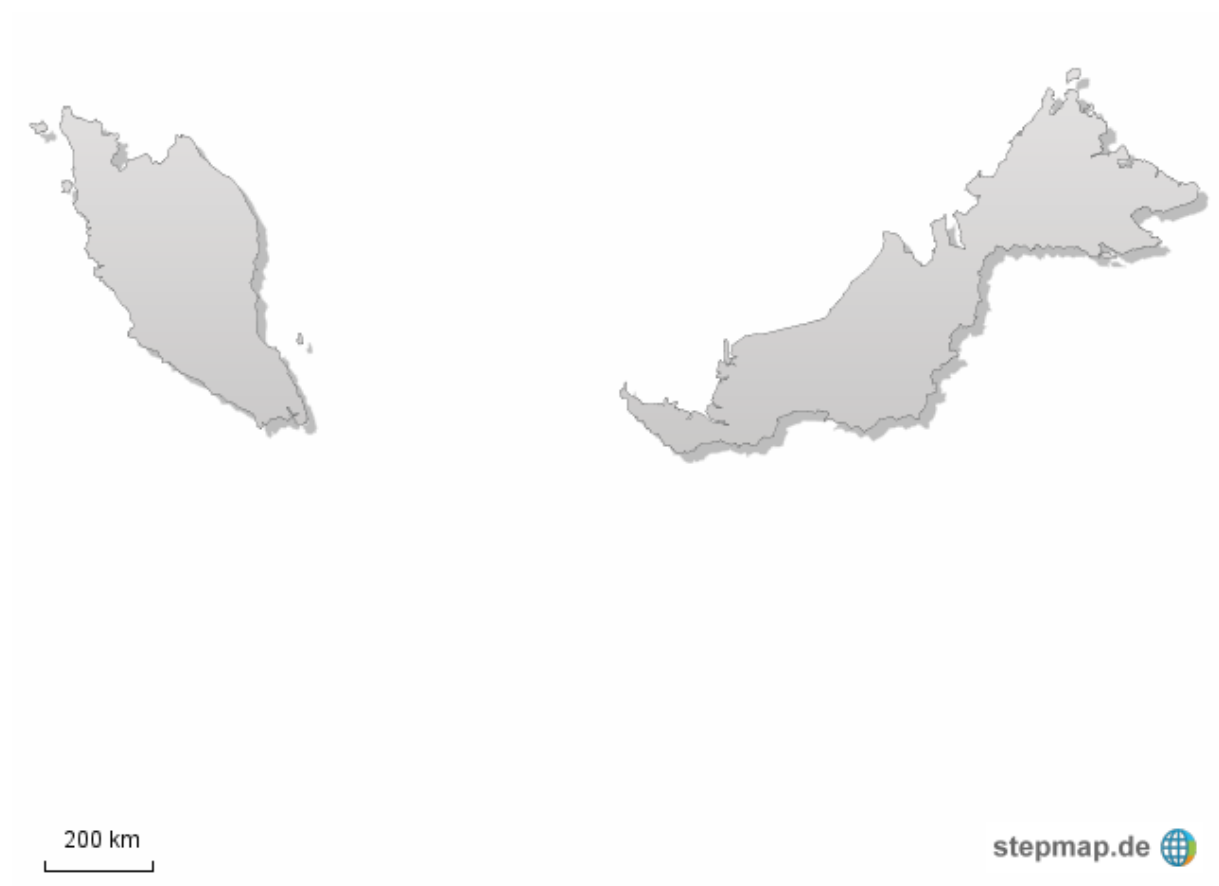
- a) North-west
- b) North-east
- c) South-east
- d) South-west



Question 13

This contour map belongs to:

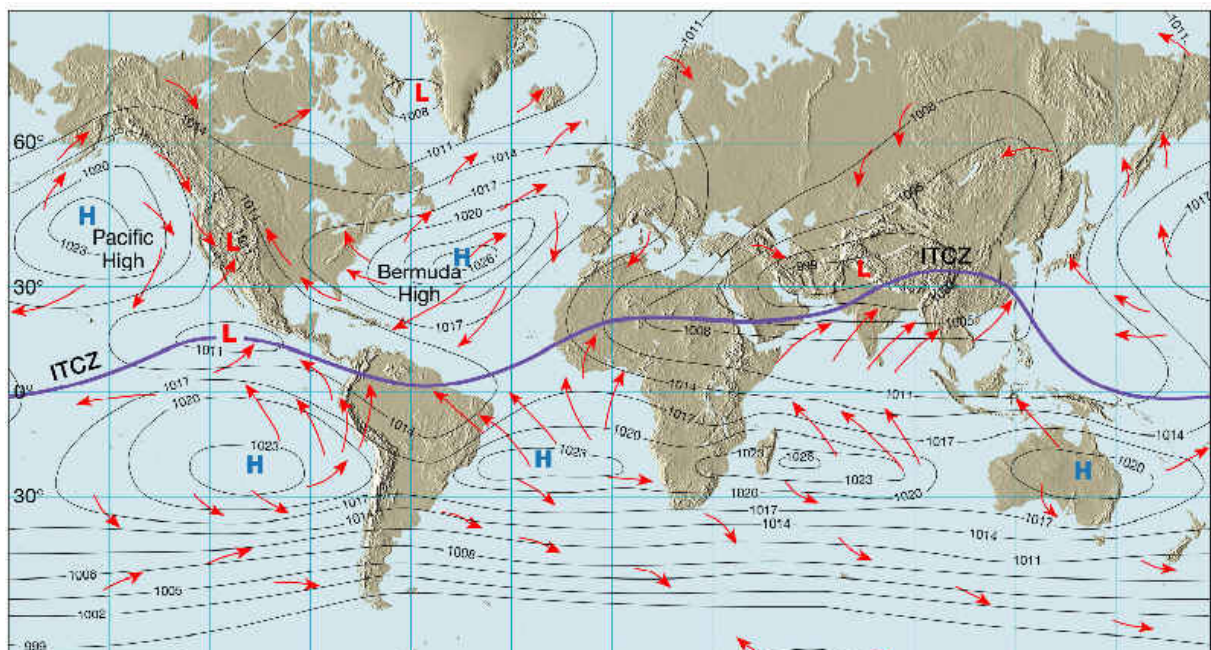
- a) Indonesia
- b) Malaysia
- c) Japan
- d) Philippines



Question 14

The map shows the average surface pressure and associated global circulation for:

- a) January
- b) October
- c) April
- d) July



Question 15

The satellite images show the Aral Sea at different times. Which country is NOT a basin country of the Aral Sea:

- a) Kazakhstan
- b) Pakistan
- c) Tajikistan
- d) Afghanistan



July - September, 1989



August 12, 2003

Question 16

This photograph shows:

- a) A cinder cone volcano
- b) A caldera of a volcano
- c) A shield volcano
- d) A maar crater

